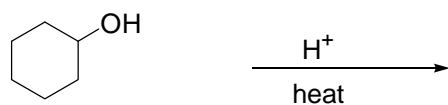
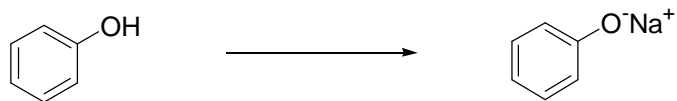
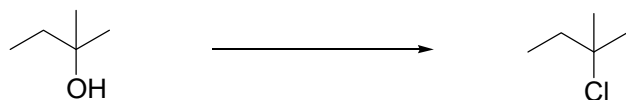
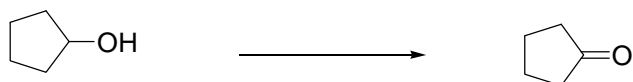



Alcohol & Phenol Reactions Practice



2. What reagent would you use to convert each of the following reactant to product indicated?



3. Give reagents that would synthesize the following compounds from starting materials indicated.

