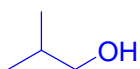


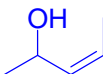
Practice Problem Answers
Nomenclature of alcohols, phenols.

Give names or structures for the following.

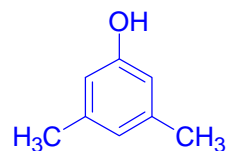
isobutyl alcohol



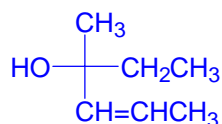
cis-pent-3-en-2-ol



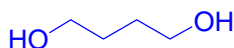
3,5-dimethylphenol



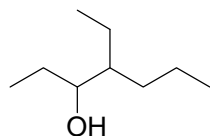
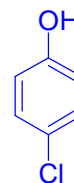
(S)-3-methylhex-4-en-3-ol



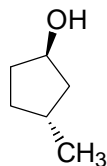
1,4-butanediol



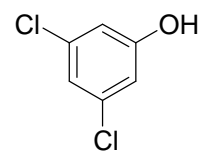
p-chlorophenol



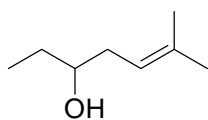
4-ethyl-3-heptanol



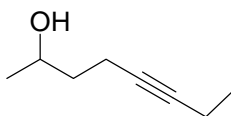
trans-3-methylcyclopentanol



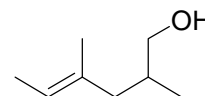
3,5-dichlorophenol



6-methyl-hept-5-en-3-ol

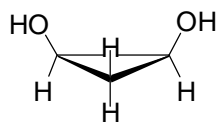
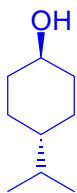


oct-5-yn-2-ol

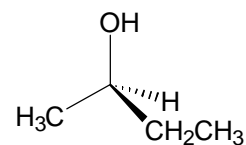


cis-2,4-dimethylhex-4-en-1-ol

trans-4-isopropylcyclohexanol



cis-1,2-cyclopropanediol



(R)-2-butanol